


Worksheet 2/2

Name: _____

Write the correct note name under each note:

Example:



= .5 beats	= 2 beats
= 1 beat	= 3 beats
= 1.5 beats	= 4 beats

Write the number of beats each note gets in 4/4 time:



accel: gradually accelerate or speed up

What do the following tell you to do:

accel:

rit:

a tempo:

Performance Portion:


Be able to sight read a short example.

Be able to play an excerpt from your repertoire that your teacher selects.

Quiz 2/2

Name: _____

1. Identify the notes in this 5-note C Major Scale:



2. Write the number of beats each note receives:




3. What does this abbreviation tell you to do?

accel. _____

Performance Portion:

1. Perform the following example with correct notes/rhythm, and good tone:



2. Play mm. ____ to ____ from " _____ " with correct notes/rhythm and good tone